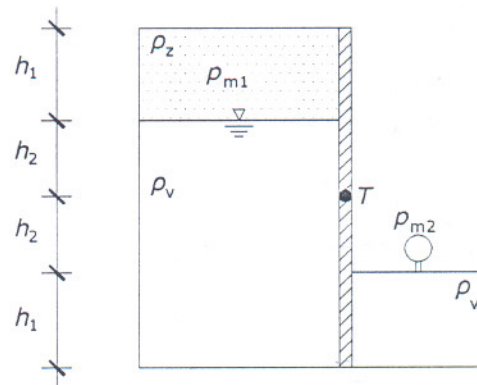


1) Dva rezervoara su napunjena vodom i zrakom kao što je prikazano na slici i razdvojena pregradom koja može rotirati oko točke T. Potrebno je izračunati tlak u manometru  $p_{m2}$  koji će omogućiti da pregrada ne rotira i bude u ravnoteži u vertikalnom položaju kao na slici. Nacrtajte dijagrame hidrostatskog tlaka na pregradu s obje strane. Zadatak je ravninski (računati na 1m širine rezervoara).

(20 bodova)

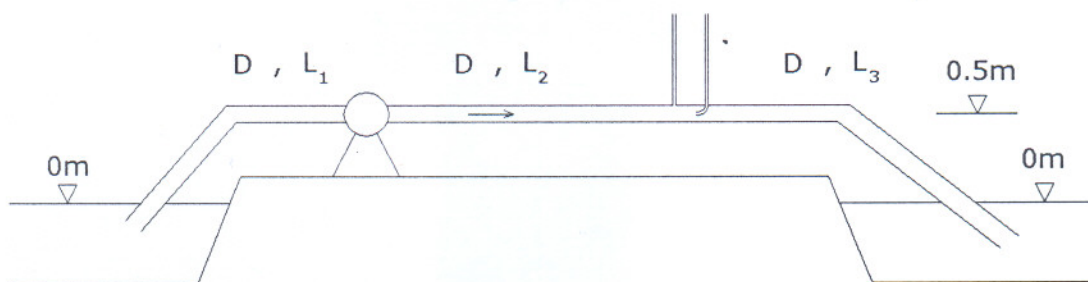
Zadano je:  $h_1=0.6\text{m}$ ;  $h_2=0.45\text{m}$ ;  $p_{m1}=-7\text{kPa}$ ;

$$\rho_v=1000\text{kg/m}^3; \quad \rho_z=0\text{kg/m}^3$$



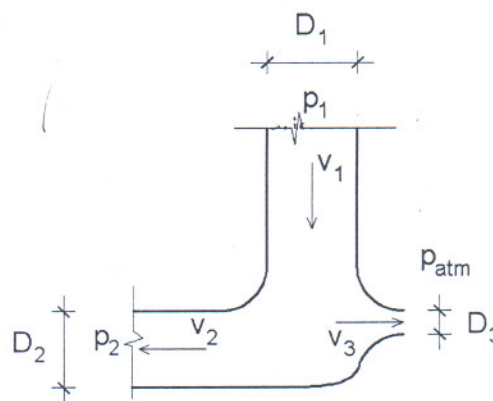
2) Za sistem na slici treba proračunati snagu pumpe koja ostvaruje tečenje vode iz lijevog rezervoara u desni. Također je potrebno odrediti razine vode u piezometru i Pitotovoj cijevi koje se nalaze na udaljenosti  $L_2$  nizvodno od pumpe i nacrtati energetska i piezometarska linija. Udaljenost između piezometra i Pitotove cijevi zanemariti. (25 bodova)

Zadano je:  $Q=0.015\text{m}^3/\text{s}$ ;  $D=0.1\text{m}$ ;  $L_1=10\text{m}$ ;  $L_2=L_3=15\text{m}$ ;  $\varepsilon=0.2\text{mm}$ ;  $\nu=10^{-6}\text{m}^2/\text{s}$ ;  $\zeta_{UL}=0.7$ ;  $\zeta_{KOLJ}=0.2$ ;  $\eta_P=0.8$



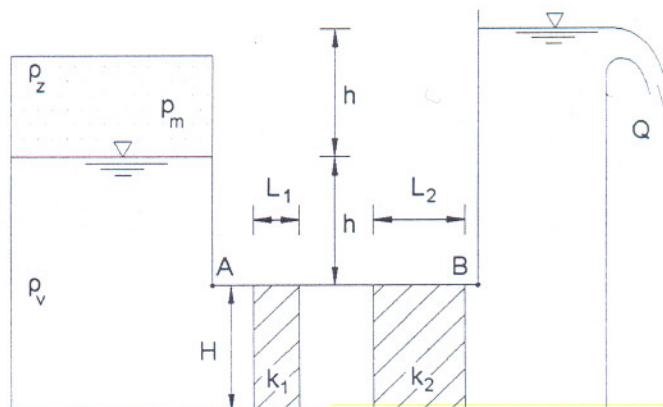
3) Potrebno je odrediti smjer i veličinu rezultantne sile kojom voda djeluje na račun položenu u horizontalnoj ravnini. Pretpostavite idealno tečenje.

Zadano je:  $Q_I=0.26\text{m}^3/\text{s}$ ;  $D_1=0.3\text{m}$ ;  $D_2=0.2\text{m}$ ;  $D_3=0.1\text{m}$ ;  
 $p_I=30\text{kPa}$ ;



4) Potrebno je odrediti tlak u komori  $p_m$  ispunjenoj zrakom zbog kojeg se ostvaruje strujanje vode kroz filterske slojeve kvadratnog poprečnog presjeka kao na slici. Potrebno je nacrtati piezometarsku liniju od točke A do točke B i izračunati silu tlaka kojom voda djeluje na filterski sloj s koeficijentom propusnosti  $k_2$ .

Zadano je:  $Q=0.005\text{m}^3/\text{s}$ ;  $k_1=0.001\text{m/s}$ ;  $k_2=0.002\text{m/s}$ ;  
 $H=1\text{m}$ ;  $L_1=0.1\text{m}$ ;  $L_2=0.2\text{m}$ ;  $h=1\text{m}$

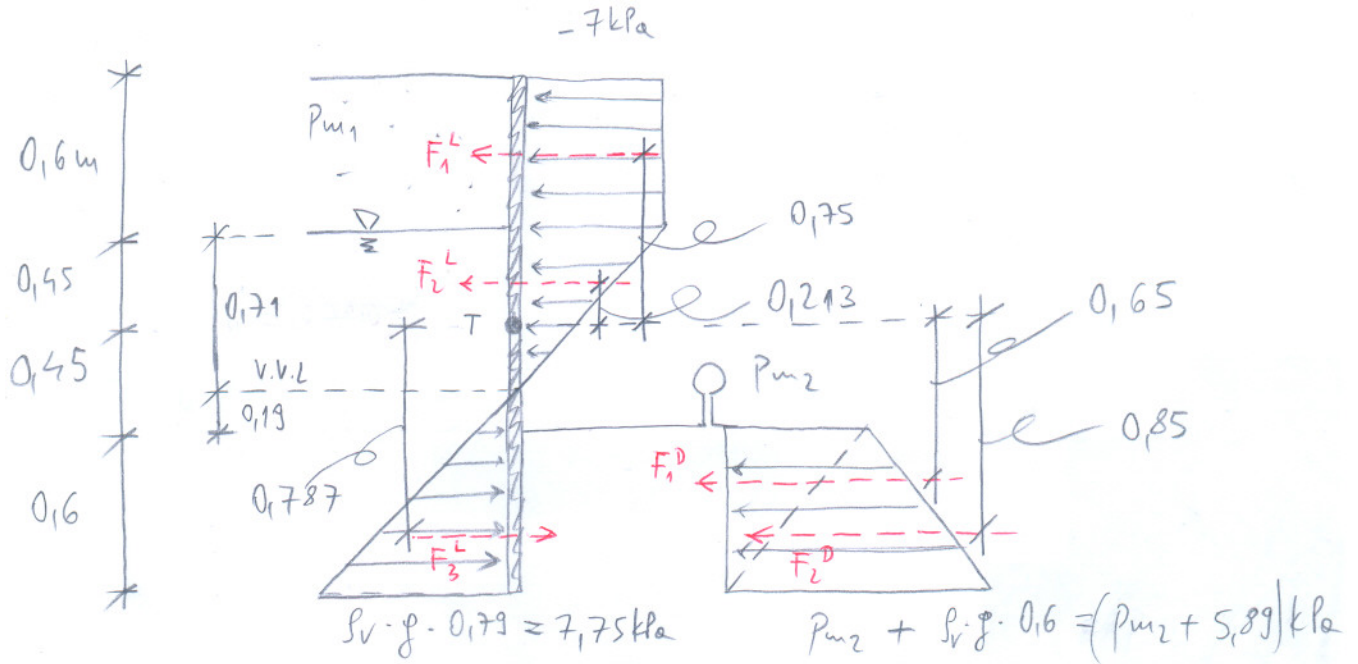


**Teorija:** (15 bodova)

1. Koje sve vrste energije sadrži Bernoullijeva jednačina?
2. Skicirajte dijagram specifične energije.
3. Što je trajektorija, a što strujnica?
4. Zašto se i gdje kod zdenca uz vodotok za rješenje sniženja postavlja fiktivni zdenac?

Za pristupanje usmenom dijelu ispita potrebno je ostvariti minimalno 50 bodova i točno riješiti 1. i 2. zadatak!

①



v.v.l.

$$h' = \frac{p_{m1}}{\rho g} = -\frac{7}{9.81} = -0.71 \text{ m}$$

$$M_T^L = M_T^D$$

$$F_1^L \cdot 0.175 + F_2^L \cdot 0.213 + F_3^L \cdot 0.787 = F_1^D \cdot 0.65 + F_2^D \cdot 0.85$$

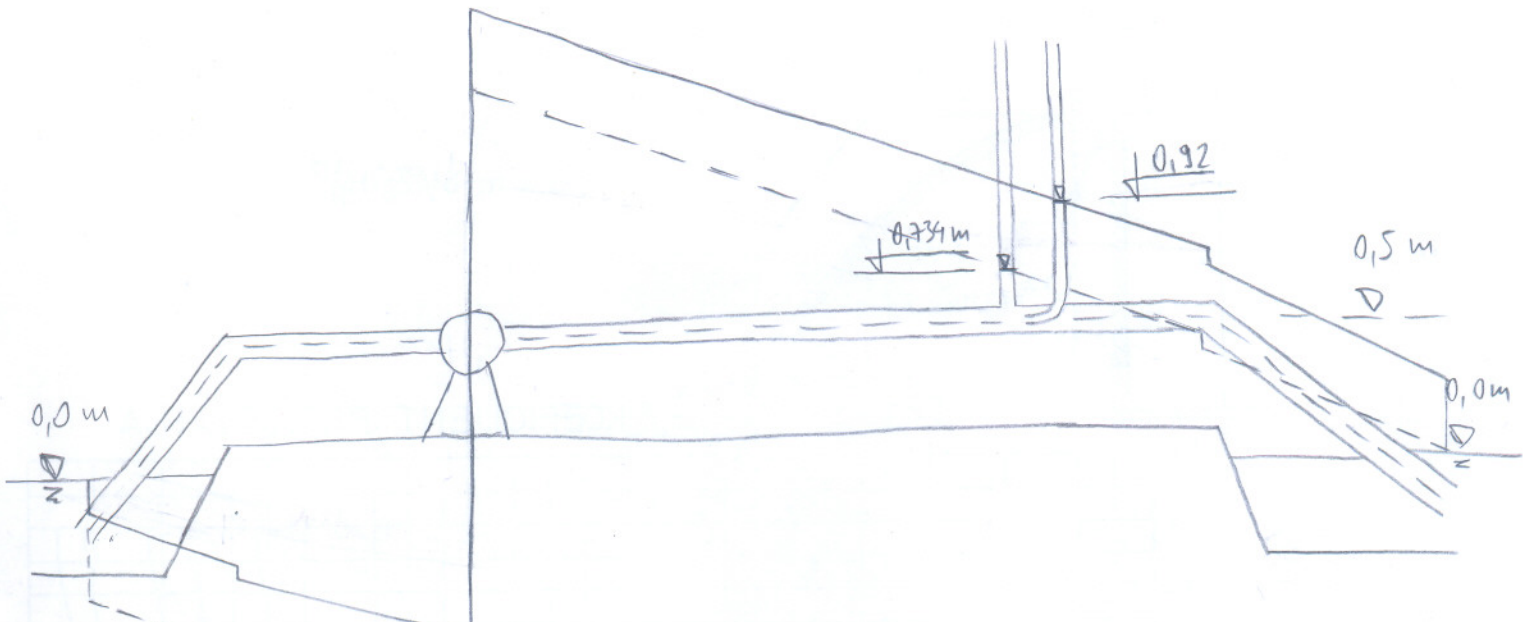
$$7 \cdot 0.16 \cdot 0.175 + 7 \cdot 0.171 \cdot \frac{1}{2} \cdot 0.213 + 7.75 \cdot 0.79 \cdot \frac{1}{2} \cdot 0.787 = p_{m2} \cdot 0.6 \cdot \frac{1}{2} \cdot 0.65 + (p_{m2} + 5.89) \cdot 0.6 \cdot \frac{1}{2} \cdot 0.85$$

$$3.15 + 0.53 + 2.41 = p_{m2} \cdot 0.195 + p_{m2} \cdot 0.255 + 1.50$$

$$4.59 = p_{m2} \cdot 0.45$$

$$p_{m2} = \underline{\underline{10.2 \text{ kPa}}}$$

2



$$v = \frac{Q \cdot 4}{D^2 \pi} = \frac{0,015 \cdot 4}{0,1^2 \pi} = 1,91 \text{ m/s} \quad \rightarrow \quad \frac{v^2}{2g} = 0,186$$

$$\frac{\Sigma}{D} = \frac{0,2}{100} = 0,002 \quad ; \quad Re = \frac{v \cdot D}{\nu} = \frac{1,91 \cdot 0,1}{10^{-6}} = 1,9 \cdot 10^5 \Rightarrow \lambda = 0,025$$

$$H_p = \frac{v^2}{2g} \left( \Sigma_{ul} + 2 \Sigma_{kcy} + \lambda \frac{L_1}{D} + \lambda \frac{L_2}{D} + \lambda \frac{L_3}{D} + 1 \right)$$

$$H_p = 0,186 \left( 0,7 + 2 \cdot 0,2 + 0,025 \cdot \frac{10}{0,1} + 2 \cdot 0,025 \cdot \frac{15}{0,1} + 1 \right)$$

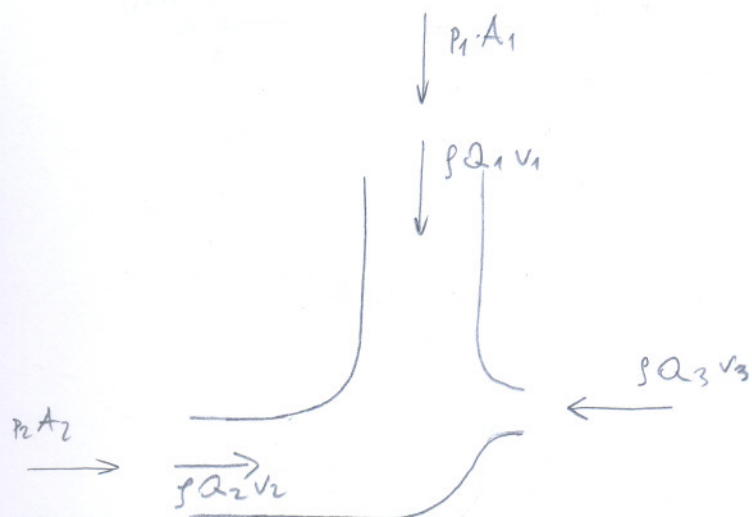
$$H_p = 0,13 + 2 \cdot 0,037 + 0,465 + 2 \cdot 0,698 + 0,186$$

$$H_p = 2,25 \text{ m}$$

$$N_p = \frac{\rho g Q H}{\eta} = \frac{1 \cdot 9,81 \cdot 0,015 \cdot 2,25}{0,8} = 0,41 \text{ kW}$$

$$H_{\text{pietometru}} = 0 - 0,13 - 0,037 - 0,465 + 2,25 - 0,698 - 0,186 = 0,734 \text{ m}$$

(3)



$$A_1 = \frac{D_1^2 \pi}{4} = \frac{0,3^2 \pi}{4} = 0,071 \text{ m}^2$$

$$A_2 = \frac{D_2^2 \pi}{4} = \frac{0,2^2 \pi}{4} = 0,031 \text{ m}^2$$

$$A_3 = \frac{D_3^2 \pi}{4} = \frac{0,1^2 \pi}{4} = 0,008 \text{ m}^2$$

$$v_1 = \frac{Q_1}{A_1} = \frac{0,26}{0,071} = \underline{3,66 \text{ m/s}}$$

Strujnica 1-3

$$\frac{P_1}{\rho g} + \frac{v_1^2}{2g} = 0 + \frac{v_3^2}{2g}$$

$$\frac{30}{9,81} + \frac{3,66^2}{2 \cdot 9,81} = \frac{v_3^2}{2 \cdot 9,81}$$

$$3,06 + 0,68 = \frac{v_3^2}{19,62} \implies v_3 = \underline{8,57 \text{ m/s}}$$

$$Q_3 = v_3 \cdot A_3 = 8,57 \cdot 0,008 = 0,069 \text{ m}^3/\text{s}$$

$$Q_2 = Q_1 - Q_3 = 0,26 - 0,069 = 0,191 \text{ m}^3/\text{s}$$

$$v_2 = \frac{Q_2}{A_2} = \frac{0,191}{0,031} = \underline{6,16 \text{ m/s}}$$

strujnica 1-2

$$\frac{P_1}{\rho g} + \frac{v_1^2}{2g} = \frac{P_2}{\rho g} + \frac{v_2^2}{2g} \implies P_2 = \left( \frac{P_1}{\rho g} + \frac{v_1^2}{2g} - \frac{v_2^2}{2g} \right) \rho g$$

$$P_2 = \left( 3,06 + 0,68 - \frac{6,16^2}{2g} \right) \rho g$$

$$p_2 = 17,71 \text{ kPa}$$

$$\downarrow 30 \cdot 0,071$$

$$\downarrow 0,26 \cdot 3,66$$

$$\xrightarrow{17,71 \cdot 0,031} \quad \xrightarrow{0,191 \cdot 6,16}$$

$$\xleftarrow{0,069 \cdot 8,57}$$

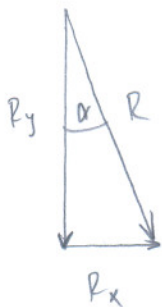


Rezultantna sila na rečvu:

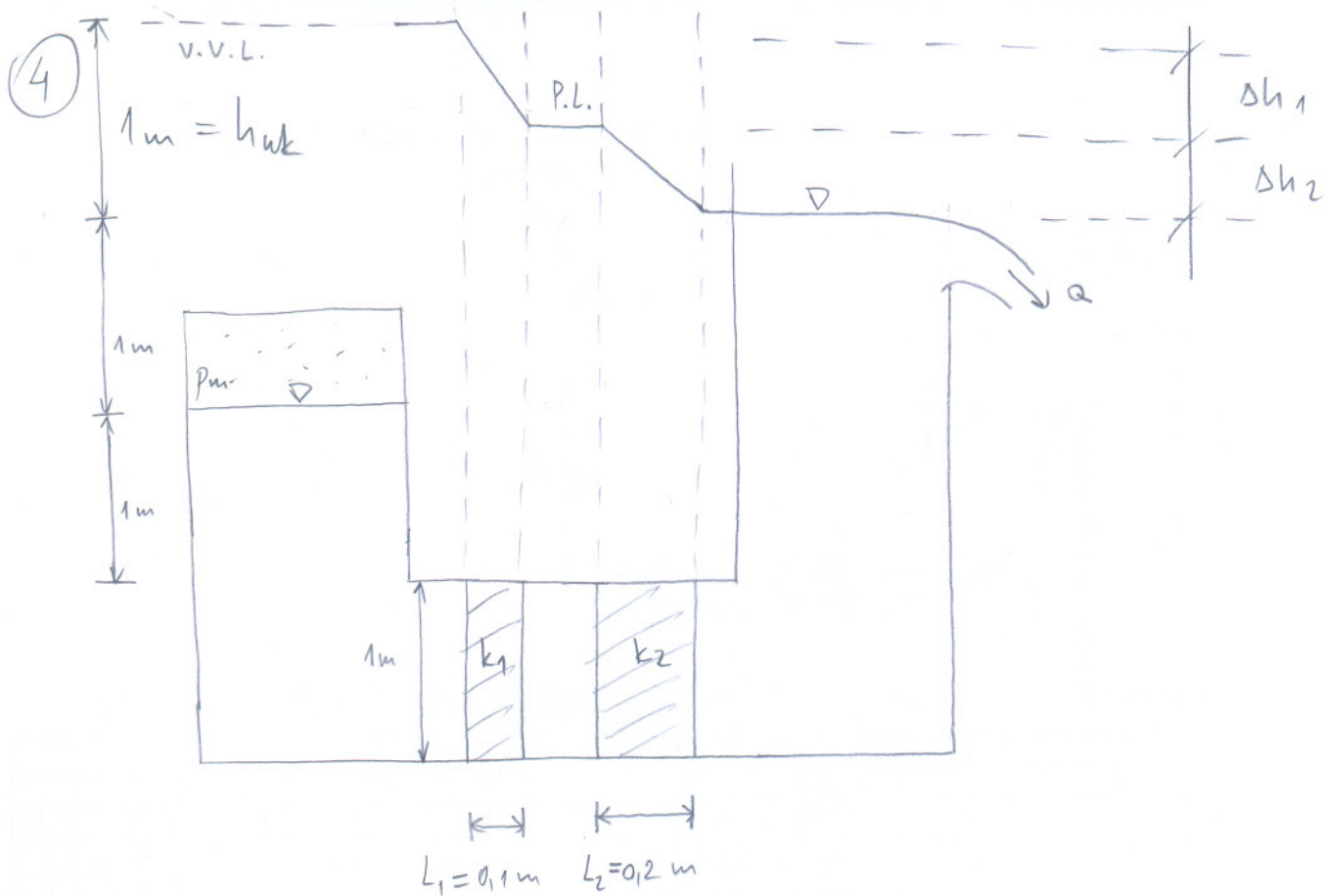
$$R_y = -30 \cdot 0,071 - 0,26 \cdot 3,66 = -3,08 \text{ kN}$$

$$R_x = 17,71 \cdot 0,031 + 0,191 \cdot 6,16 - 0,069 \cdot 8,57 = 1,13 \text{ kN}$$

$$R = \sqrt{R_y^2 + R_x^2} = \underline{\underline{3,28 \text{ kN}}}$$



$$\tan \alpha = \frac{|R_x|}{|R_y|} = \frac{1,13}{3,08} = 0,367 \rightarrow \alpha = \underline{\underline{20,15^\circ}}$$



$$v = \frac{Q}{A} = \frac{Q}{H^2} = \frac{0,005}{1^2} = 0,005 \text{ m/s}$$

$$v = k \cdot J = k \cdot \frac{\Delta h}{\Delta l} \rightarrow \Delta h = \frac{v \cdot \Delta l}{k}$$

$$\Delta h_1 = \frac{v \cdot L_1}{k_1} = \frac{0,005 \cdot 0,1}{0,001} = 0,5 \text{ m}$$

$$\Delta h_2 = \frac{v \cdot L_2}{k_2} = \frac{0,005 \cdot 0,2}{0,002} = 0,5 \text{ m}$$

$$\Delta h_{uk} = \Delta h_1 + \Delta h_2 = 1 \text{ m}$$

$$\frac{p_m}{\rho g} = h + \Delta h_{uk} = 2 \text{ m}$$

$$p_m = 19,62 \text{ kPa}$$

$$F = \Delta p \cdot A = \rho g (h_{uzv} - h_{unz}) \cdot H^2 = \rho \cdot g \cdot 0,5 \cdot 1^2 = 4,905 \text{ kN}$$