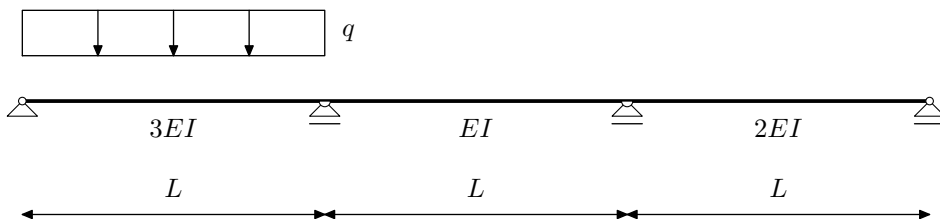


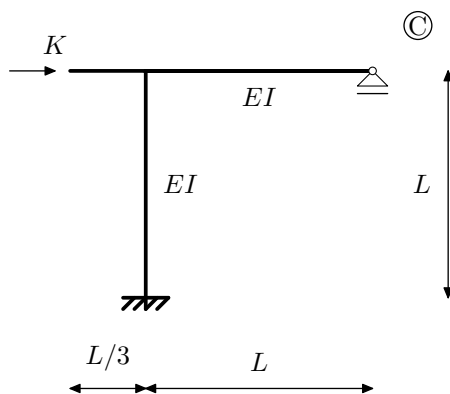
NMK –1.KOLOKVIJ, 2.12.2016.-1

Zadatak 1.a. (15) Metodom pomaka odredite momentni dijagram.

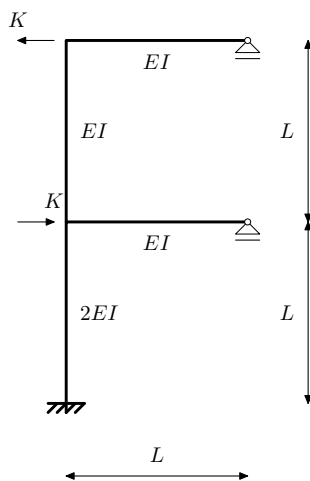
Zadatak 1.b. (15) Crossovom metodom odredite momentni dijagram.



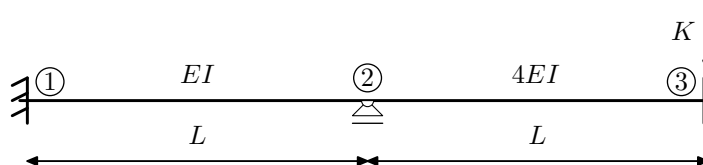
Zadatak 2. (25) Za opterećenje silom K Crossovim postupkom odredite pomak h_C .



Zadatak 3. (20) Postupkom Csonka-Werner odredite M dijagram.



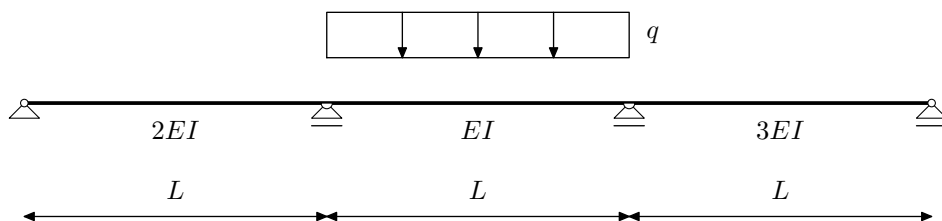
Zadatak 4. (25) Pomoću utjecajne funkcije $\eta_{M_{23}}$ odredite iznos $M_{23}(K)$



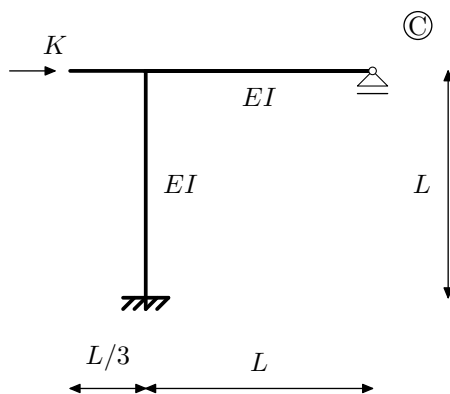
NMK –1.KOLOKVIJ, 2.12.2016.-2

Zadatak 1.a. (15) Metodom pomaka odredite momentni dijagram.

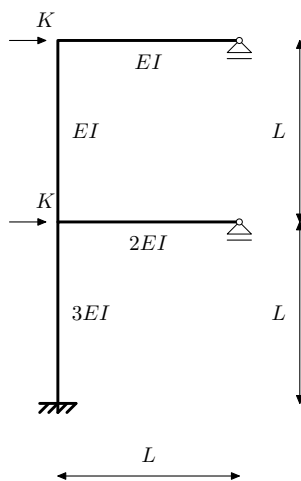
Zadatak 1.b. (15) Crossovom metodom odredite momentni dijagram.



Zadatak 2. (25) Za opterećenje silom K Crossovim postupkom odredite pomak h_C .



Zadatak 3. (20) Postupkom Csonka-Werner odredite M dijagram.



Zadatak 4. (25) Pomoću utjecajne funkcije $\eta_{M_{23}}$ odredite iznos $M_{23}(K)$

