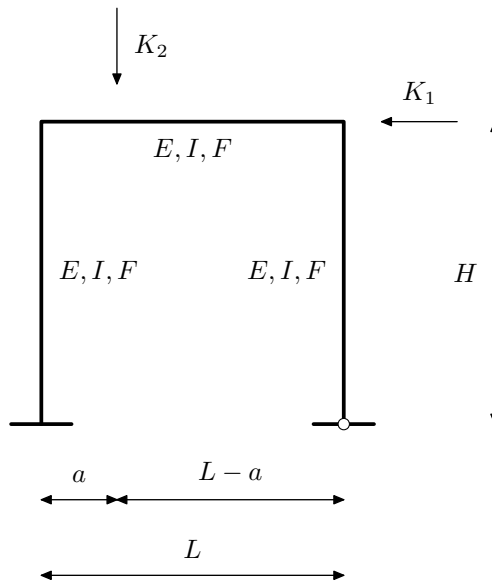
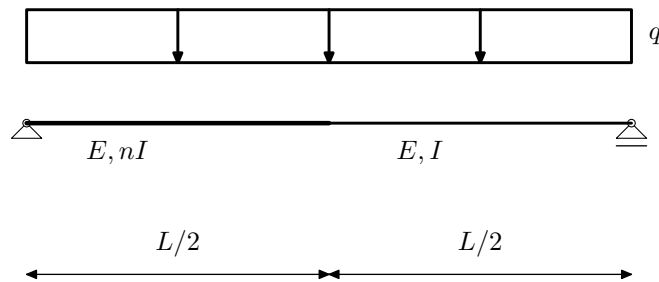


1

- Metodom pomaka odredite M dijagram
- Inženjerskom metodom pomaka odredite M i T dijagram
- Proračun programom DiM
- Proračun programom DiM uz $F \geq 10^8 \text{m}^2$

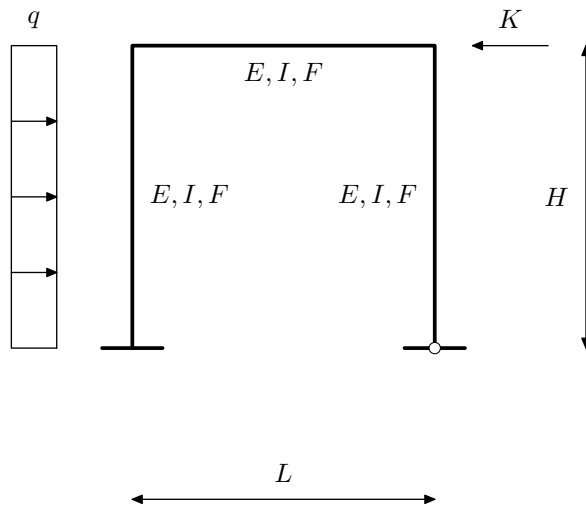


- Inženjerskom metodom pomaka odredite M i T dijagram
- Proračun programom DiM

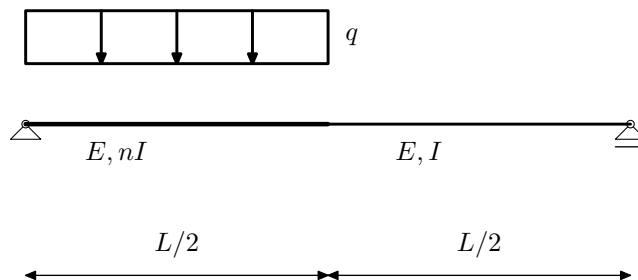


2

- Metodom pomaka odredite M dijagram
- Inženjerskom metodom pomaka odredite M i T dijagram
- Proračun programom DiM
- Proračun programom DiM uz $F \geq 10^8 \text{m}^2$

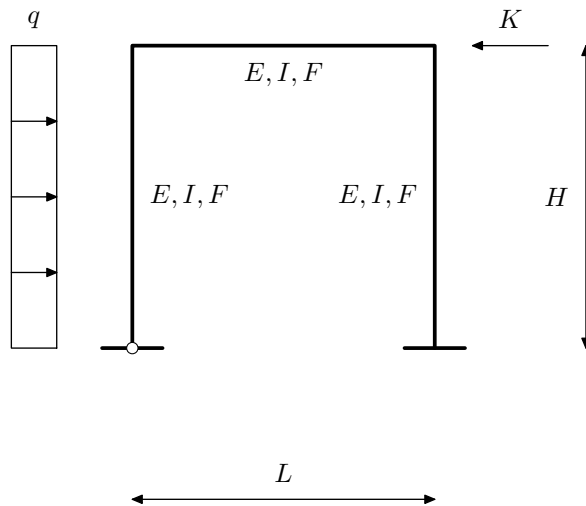


- Inženjerskom metodom pomaka odredite M i T dijagram
- Proračun programom DiM

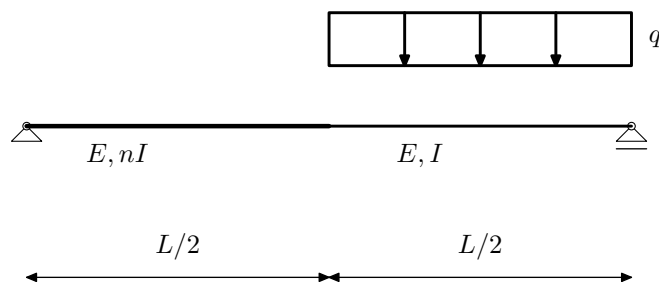


3

- Metodom pomaka odredite M dijagram
- Inženjerskom metodom pomaka odredite M i T dijagram
- Proračun programom DiM
- Proračun programom DiM uz $F \geq 10^8 \text{m}^2$

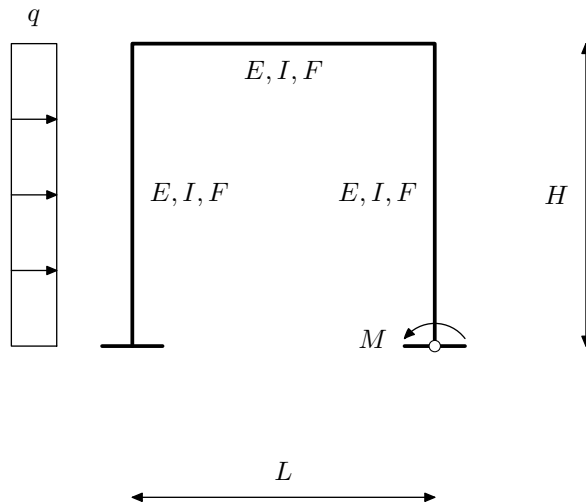


- Inženjerskom metodom pomaka odredite M i T dijagram
- Proračun programom DiM

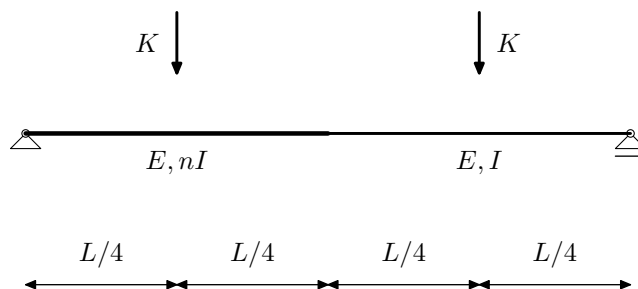


4

- Metodom pomaka odredite M dijagram
- Inženjerskom metodom pomaka odredite M i T dijagram
- Proračun programom DiM
- Proračun programom DiM uz $F \geq 10^8 \text{m}^2$

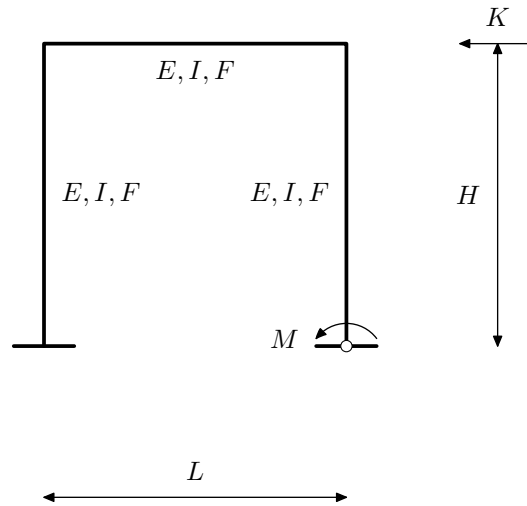


- Inženjerskom metodom pomaka odredite M i T dijagram
- Proračun programom DiM

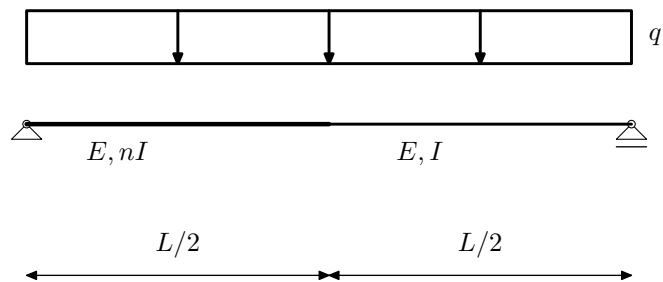


5

- Metodom pomaka odredite M dijagram
- Inženjerskom metodom pomaka odredite M i T dijagram
- Proračun programom DiM
- Proračun programom DiM uz $F \geq 10^8 \text{m}^2$

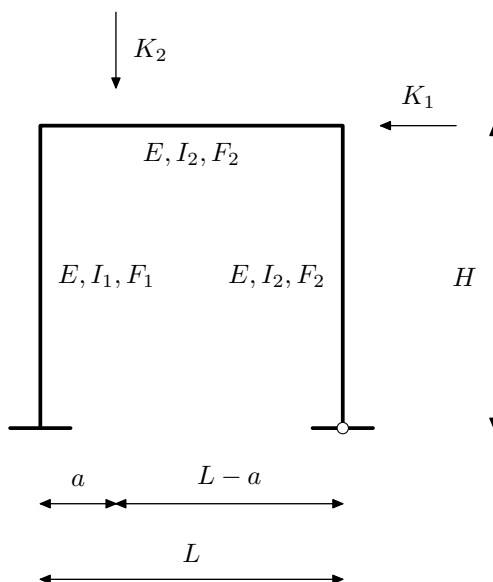


- Inženjerskom metodom pomaka odredite M i T dijagram
- Proračun programom DiM

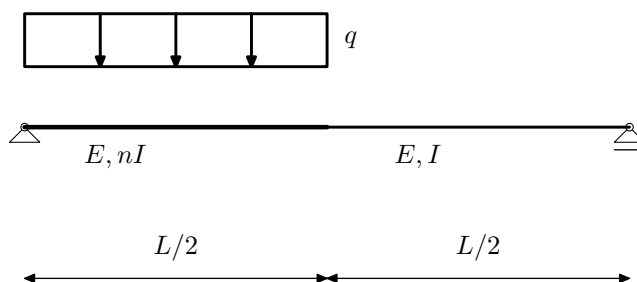


6

- Metodom pomaka odredite M dijagram
- Inženjerskom metodom pomaka odredite M i T dijagram
- Proračun programom DiM
- Proračun programom DiM uz $F \geq 10^8 \text{m}^2$

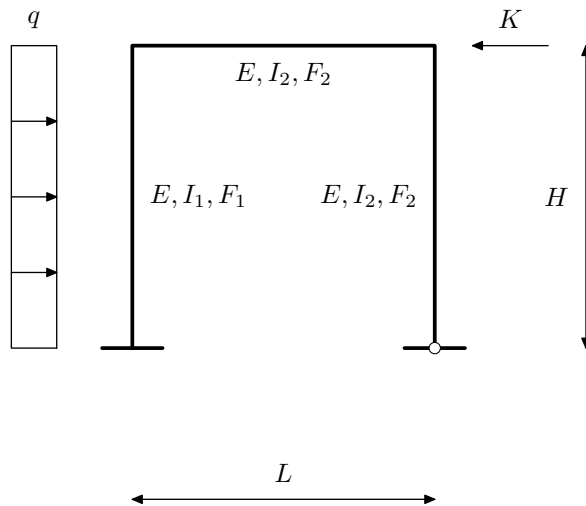


- Inženjerskom metodom pomaka odredite M i T dijagram
- Proračun programom DiM

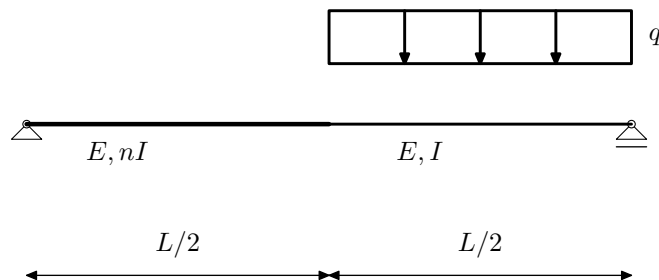


7

- Metodom pomaka odredite M dijagram
- Inženjerskom metodom pomaka odredite M i T dijagram
- Proračun programom DiM
- Proračun programom DiM uz $F \geq 10^8 \text{m}^2$

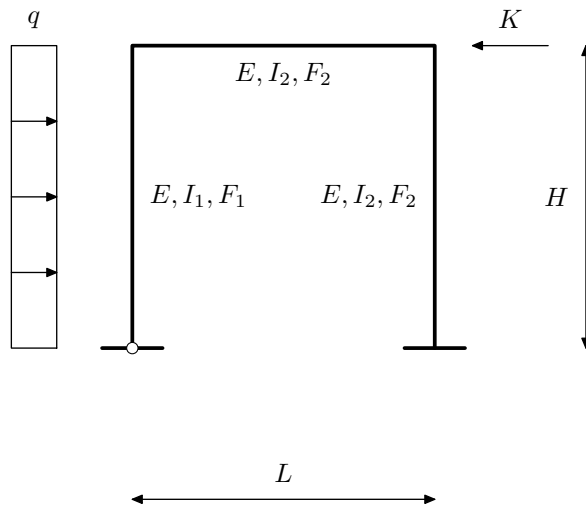


- Inženjerskom metodom pomaka odredite M i T dijagram
- Proračun programom DiM

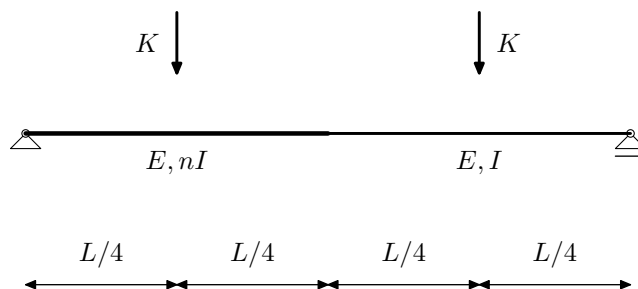


8

- Metodom pomaka odredite M dijagram
- Inženjerskom metodom pomaka odredite M i T dijagram
- Proračun programom DiM
- Proračun programom DiM uz $F \geq 10^8 \text{m}^2$

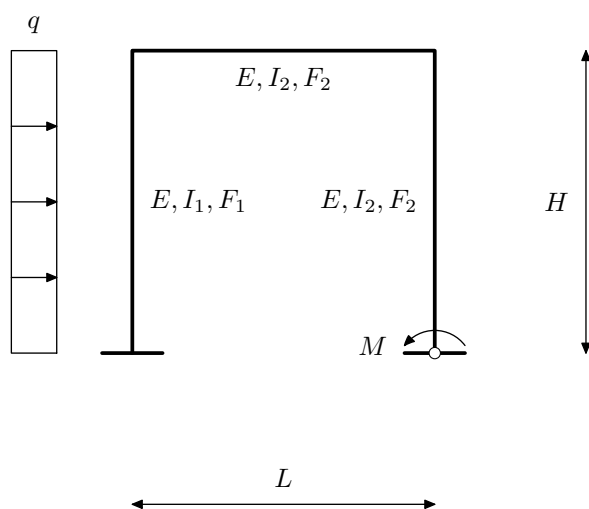


- Inženjerskom metodom pomaka odredite M i T dijagram
- Proračun programom DiM

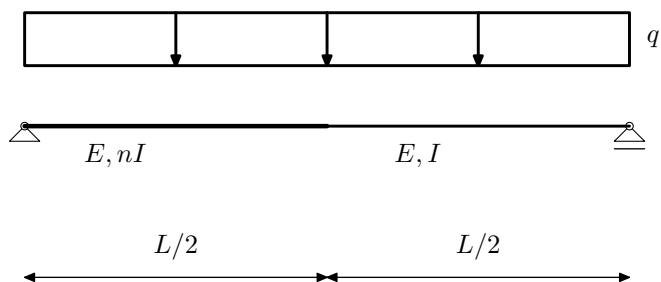


9

- Metodom pomaka odredite M dijagram
- Inženjerskom metodom pomaka odredite M i T dijagram
- Proračun programom DiM
- Proračun programom DiM uz $F \geq 10^8 \text{m}^2$

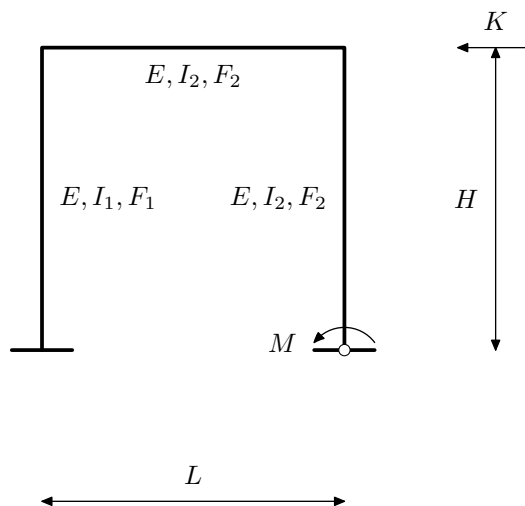


- Inženjerskom metodom pomaka odredite M i T dijagram
- Proračun programom DiM



10

- Metodom pomaka odredite M dijagram
- Inženjerskom metodom pomaka odredite M i T dijagram
- Proračun programom DiM
- Proračun programom DiM uz $F \geq 10^8 \text{m}^2$



- Inženjerskom metodom pomaka odredite M i T dijagram
- Proračun programom DiM

