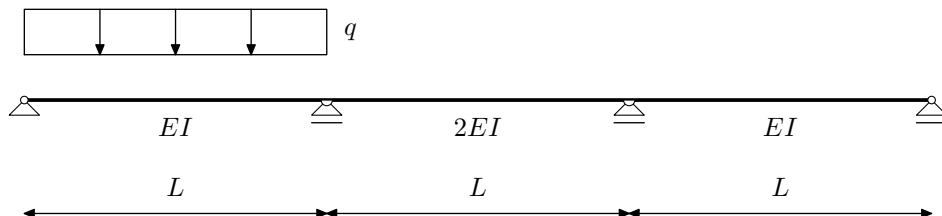


NMK –1.KOLOKVIJ, 26.11.2007.

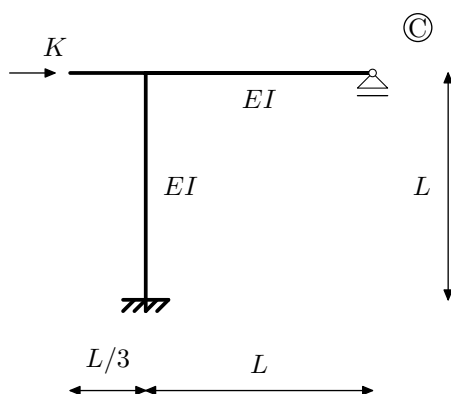
Zadatak 1.a. (10) Metodom pomaka odredite momentni dijagram.

Zadatak 1.b. (10) Crossovom metodom odredite momentni dijagram.

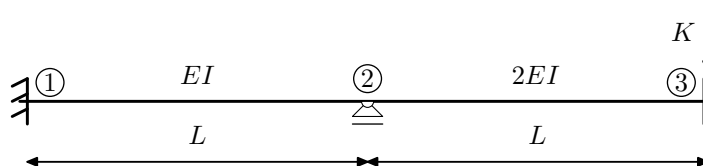


Zadatak 2.a. (20) Za opterećenje silom K Crossovim postupkom odredite pomak h_C .

Zadatak 2.b. (20) Metodom pomaka odredite utjecajnu liniju za ležajni moment.



Zadatak 3. (30) Pomoću utjecajne funkcije η_{M_1} odredite iznos $M(K)$



Zadatak 4. (10) Navedite osnovne pretpostavke metode Csonka-Werner