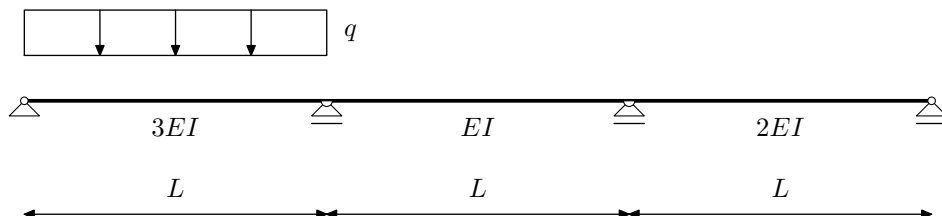


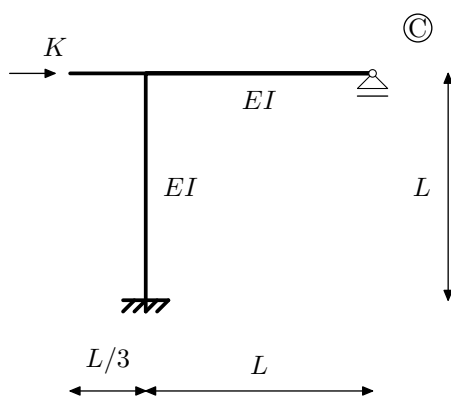
NMK –1.KOLOKVIJ, 28.11.2008.

Zadatak 1.a. (10) Metodom pomaka odredite momentni dijagram.

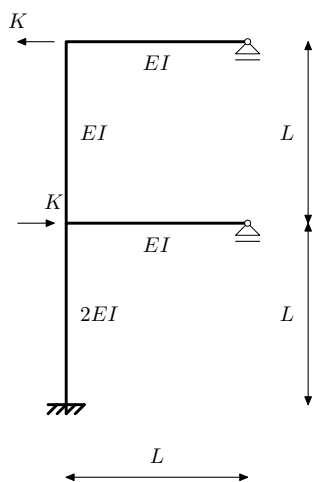
Zadatak 1.b. (10) Crossovom metodom odredite momentni dijagram.



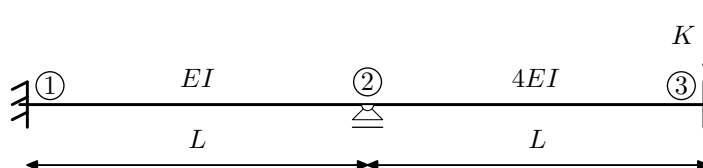
Zadatak 2. (20) Za opterećenje silom K Crossovim postupkom odredite pomak h_C .



Zadatak 3. (15) Postupkom Csonka-Werner odredite M dijagram.



Zadatak 4. (25) Pomoću utjecajne funkcije $\eta_{M_{23}}$ odredite iznos $M_{23}(K)$



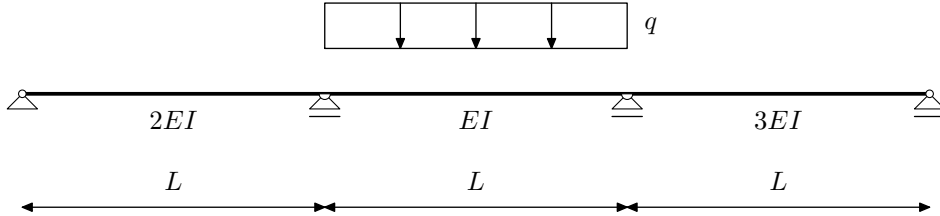
Zadatak 5. (10) Navedite osnovne pretpostavke metode Csonka-Werner

Zadatak 6. (10) Što je utjecajna funkcija? Što predstavlja utjecajna linija?

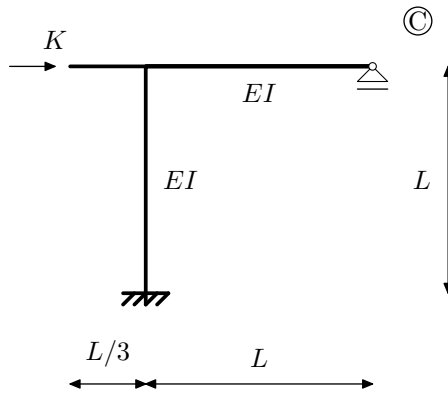
NMK –1.KOLOKVIJ, 28.11.2008.

Zadatak 1.a. (10) Metodom pomaka odredite momentni dijagram.

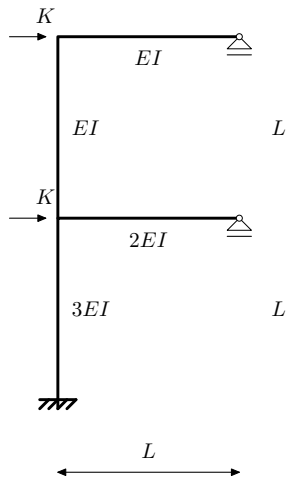
Zadatak 1.b. (10) Crossovom metodom odredite momentni dijagram.



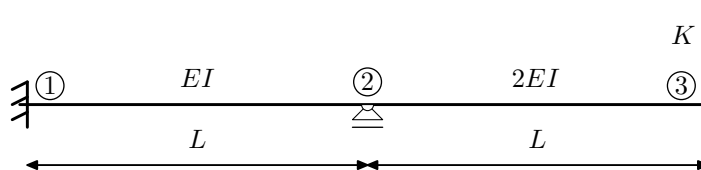
Zadatak 2. (20) Za opterećenje silom K Crossovim postupkom odredite pomak h_C .



Zadatak 3. (15) Postupkom Csonka-Werner odredite M dijagram.



Zadatak 4. (25) Pomoću utjecajne funkcije $\eta_{M_{23}}$ odredite iznos $M_{23}(K)$



Zadatak 5. (10) Navedite osnovne pretpostavke metode Csonka-Werner

Zadatak 6. (10) Što je utjecajna funkcija? Što predstavlja utjecajna linija?