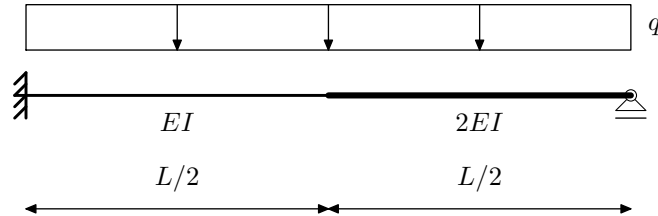
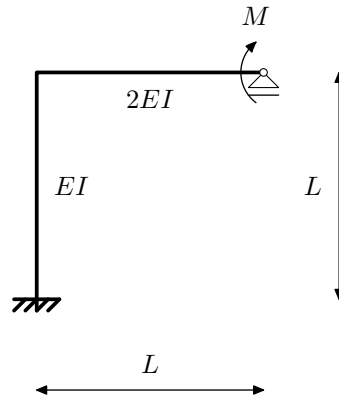


# NMK –1.KOLOKVIJ, 26.11.2010. - A

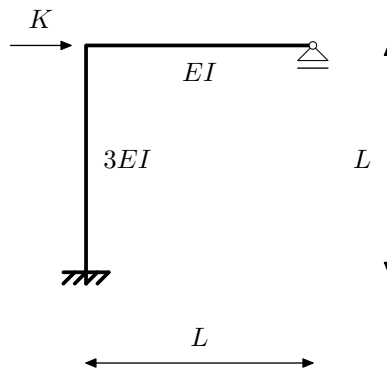
Zadatak 1. (30) Inženjerskom metodom pomaka odredite momentni dijagram.



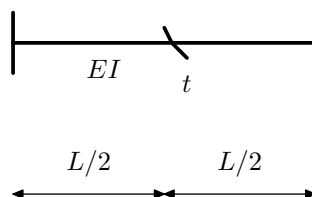
Zadatak 2. (25) Crossovim postupkom odredite momentni dijagram.



Zadatak 3. (15) Postupkom Csonka-Werner odredite M dijagram.



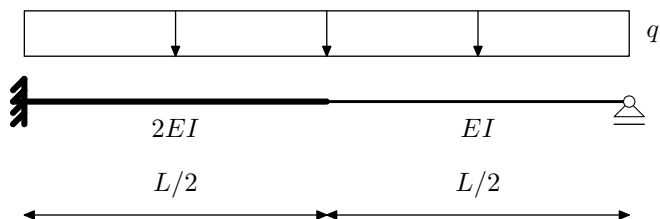
Zadatak 4. (20) Odredite utjecajnu funkciju  $\eta_{M_t}$



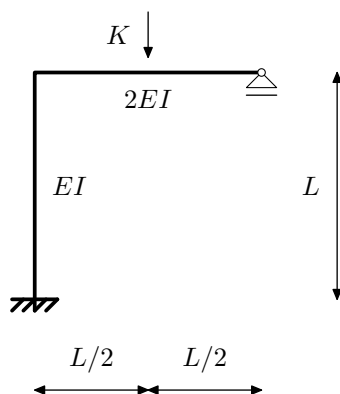
Zadatak 5. (10) Navedite osnovne pretpostavke metode Csonka-Werner

# NMK –1.KOLOKVIJ, 26.11.2010. - B

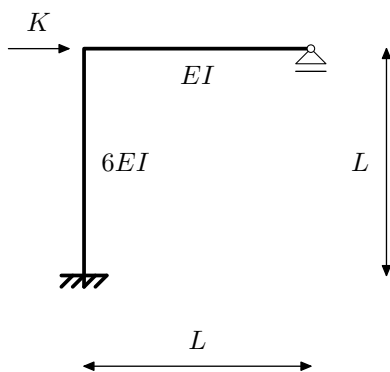
Zadatak 1. (30) Inženjerskom metodom pomaka odredite momentni dijagram.



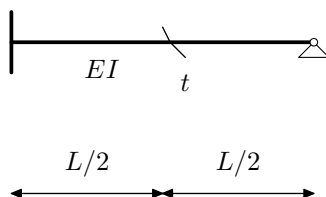
Zadatak 2. (25) Crossovim postupkom odredite momentni dijagram.



Zadatak 3. (15) Postupkom Csonka-Werner odredite M dijagram.



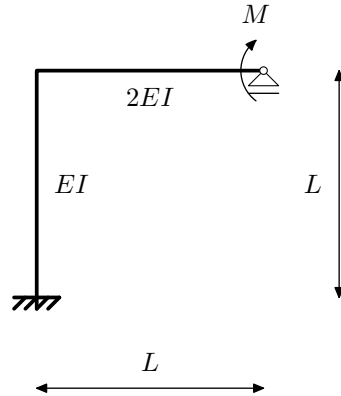
Zadatak 4. (20) Odredite utjecajnu funkciju  $\eta_{M_t}$



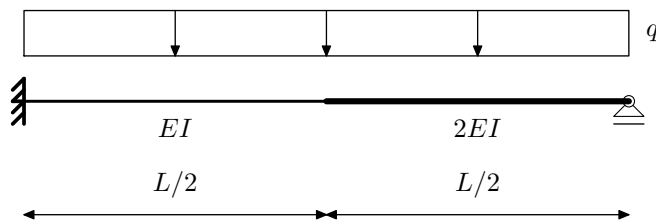
Zadatak 5. (10) Objasnite razliku metode pomaka i inženjerske metode pomaka.

# NMK –1.KOLOKVIJ, 26.11.2010. - C

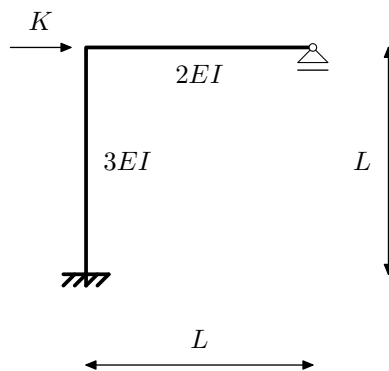
Zadatak 1. (30) Inženjerskom metodom pomaka odredite momentni dijagram.



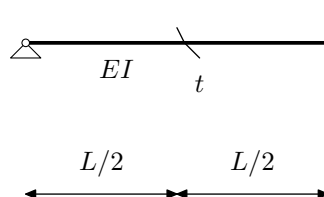
Zadatak 2. (25) Crossovim postupkom odredite momentni dijagram.



Zadatak 3. (15) Postupkom Csonka-Werner odredite M dijagram.



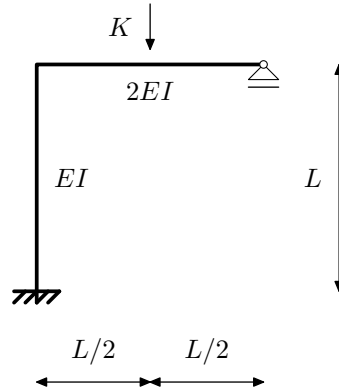
Zadatak 4. (20) Odredite utjecajnu funkciju  $\eta_{M_t}$



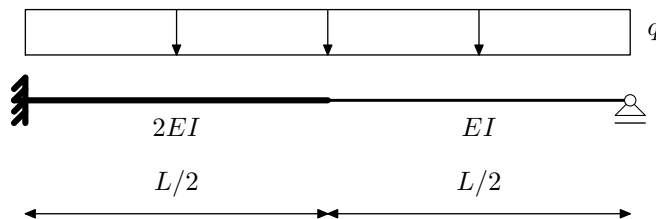
Zadatak 5. (10) Navedite osnovne pretpostavke metode Csonka-Werner

# NMK –1.KOLOKVIJ, 26.11.2010. - D

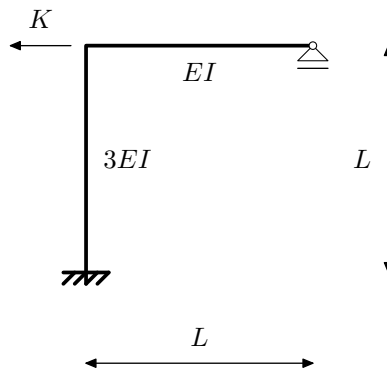
Zadatak 1. (30) Inženjerskom metodom pomaka odredite momentni dijagram.



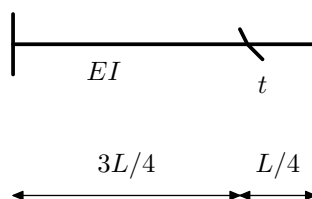
Zadatak 2. (25) Crossovim postupkom odredite momentni dijagram.



Zadatak 3. (15) Postupkom Csonka-Werner odredite M dijagram.



Zadatak 4. (20) Odredite utjecajnu funkciju  $\eta_{M_t}$



Zadatak 5. (10) Objasnite razliku metode pomaka i inženjerske metode pomaka.