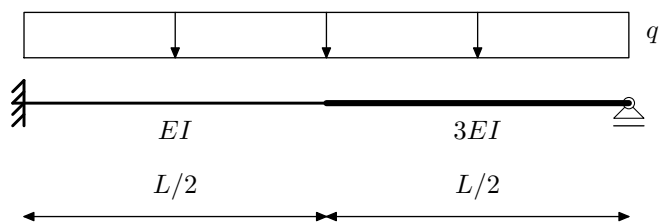
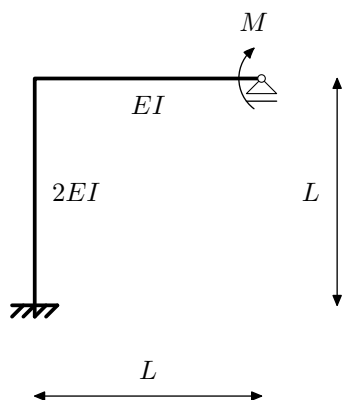


NMK –1.KOLOKVIJ, 2.12.2011. - A

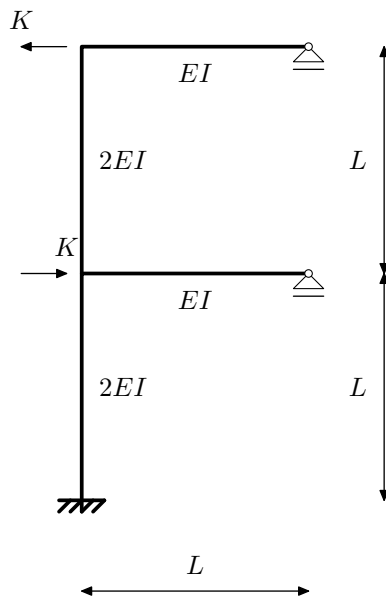
Zadatak 1. (30) Inženjerskom metodom pomaka odredite momentni dijagram.



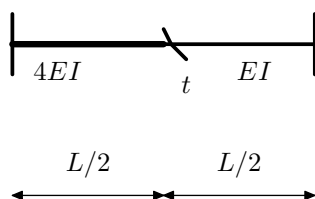
Zadatak 2. (25) Crossovim postupkom odredite momentni dijagram.



Zadatak 3. (20) Postupkom Csonka-Werner odredite M dijagram.



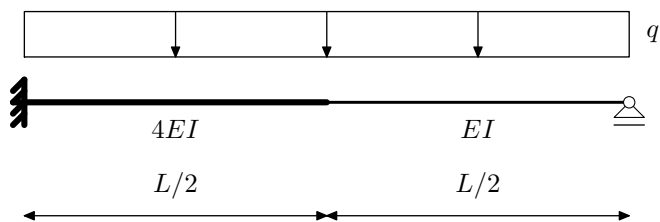
Zadatak 4. (15) Odredite utjecajnu funkciju η_{M_t}



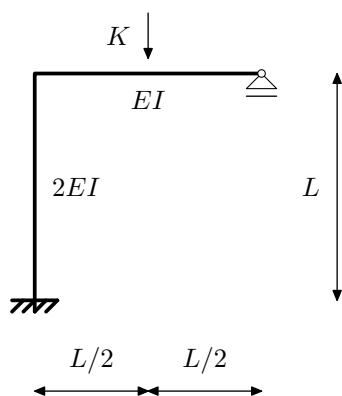
Zadatak 5. (10) Navedite osnovne pretpostavke metode Csonka-Werner

NMK –1.KOLOKVIJ, 2.12.2011. - B

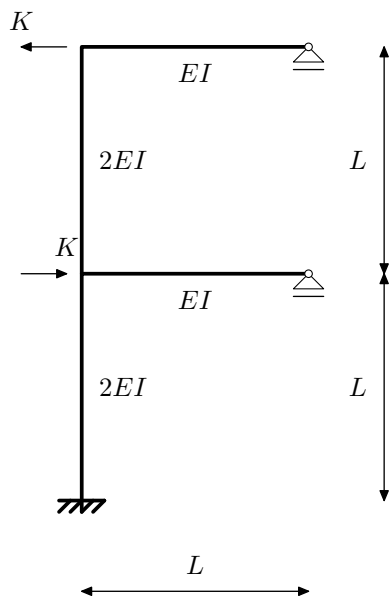
Zadatak 1. (30) Inženjerskom metodom pomaka odredite momentni dijagram.



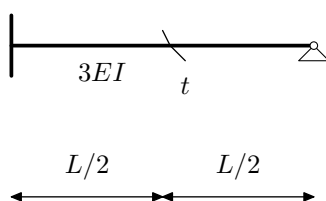
Zadatak 2. (25) Crossovim postupkom odredite momentni dijagram.



Zadatak 3. (20) Postupkom Csonka-Werner odredite M dijagram.



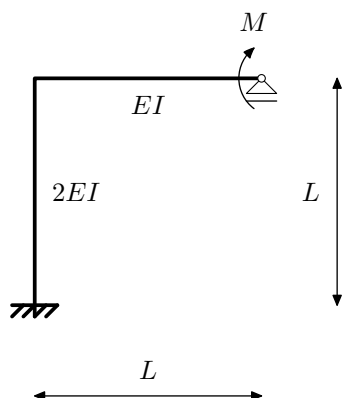
Zadatak 4. (15) Odredite utjecajnu funkciju η_{M_t}



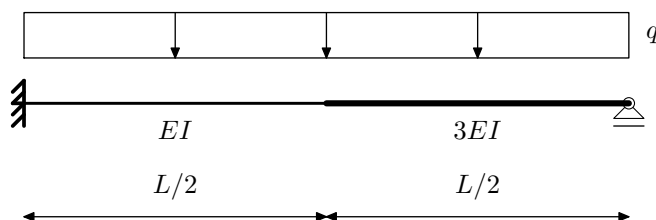
Zadatak 5. (10) Objasnite razliku metode pomaka i inženjerske metode pomaka.

NMK –1.KOLOKVIJ, 2.12.2011. - C

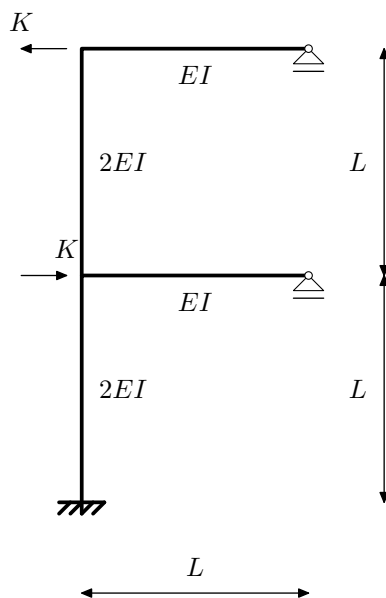
Zadatak 1. (30) Inženjerskom metodom pomaka odredite momentni dijagram.



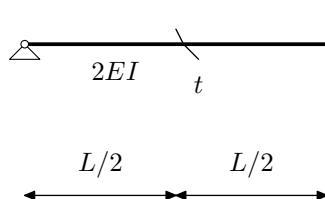
Zadatak 2. (25) Crossovim postupkom odredite momentni dijagram.



Zadatak 3. (20) Postupkom Csonka-Werner odredite M dijagram.



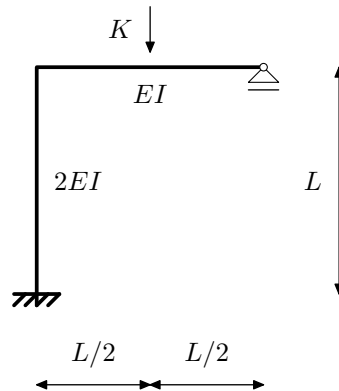
Zadatak 4. (15) Odredite utjecajnu funkciju η_{M_t}



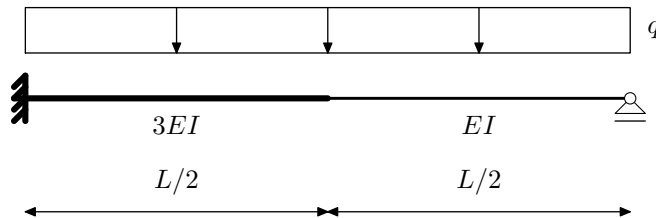
Zadatak 5. (10) Navedite osnovne pretpostavke metode Csonka-Werner

NMK –1.KOLOKVIJ, 2.12.2011. - D

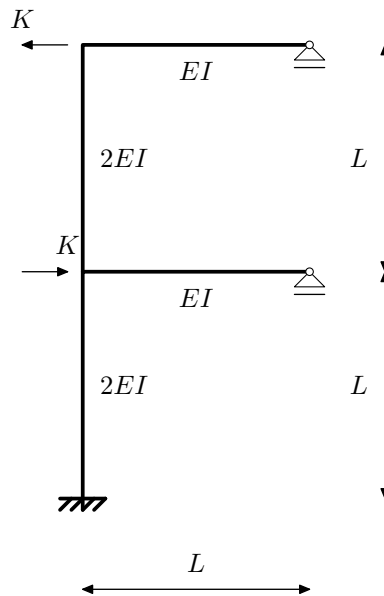
Zadatak 1. (30) Inženjerskom metodom pomaka odredite momentni dijagram.



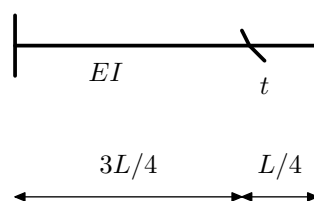
Zadatak 2. (25) Crossovim postupkom odredite momentni dijagram.



Zadatak 3. (20) Postupkom Csonka-Werner odredite M dijagram.



Zadatak 4. (15) Odredite utjecajnu funkciju η_{M_t}



Zadatak 5. (10) Objasnite razliku metode pomaka i inženjerske metode pomaka.