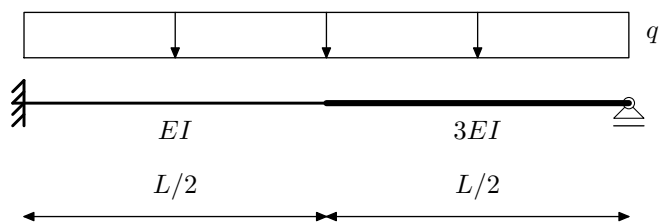
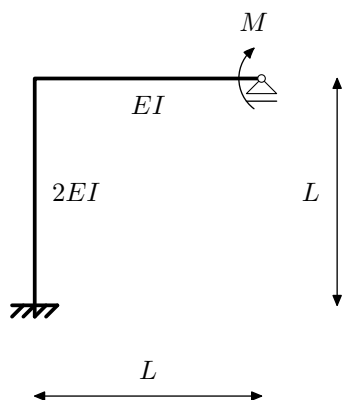


NMK –1.KOLOKVIJ, 30.11.2012. - A

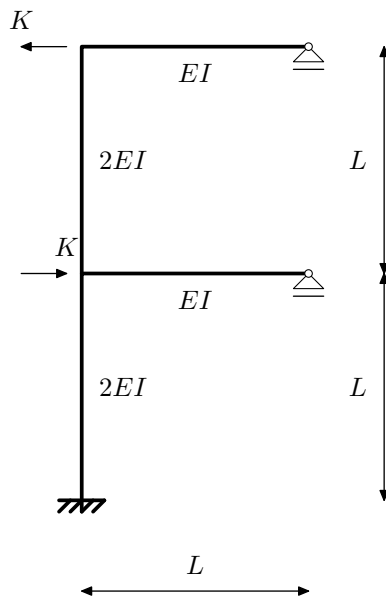
Zadatak 1. (30) Inženjerskom metodom pomaka odredite momentni dijagram.



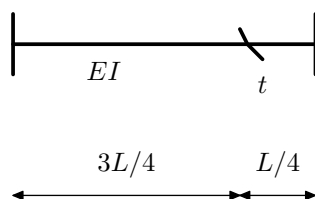
Zadatak 2. (25) Crossovim postupkom odredite horizontalni pomak kliznog ležaja.



Zadatak 3. (20) Postupkom Csonka-Werner odredite M dijagram.



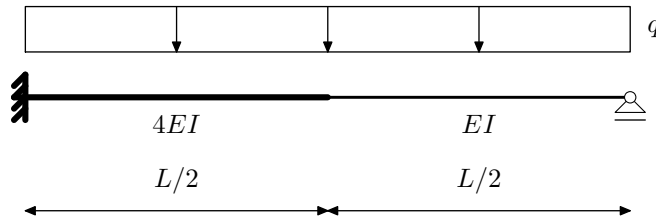
Zadatak 4. (15) Odredite utjecajnu funkciju η_{M_t}



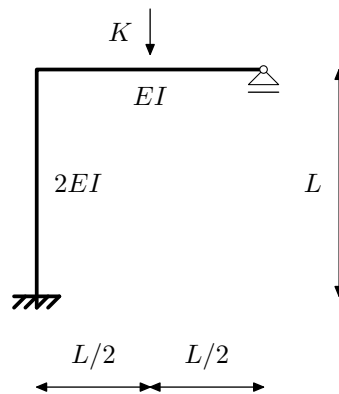
Zadatak 5. (10) Navedite osnovne pretpostavke metode Csonka-Werner

NMK –1.KOLOKVIJ, 30.11.2012. - B

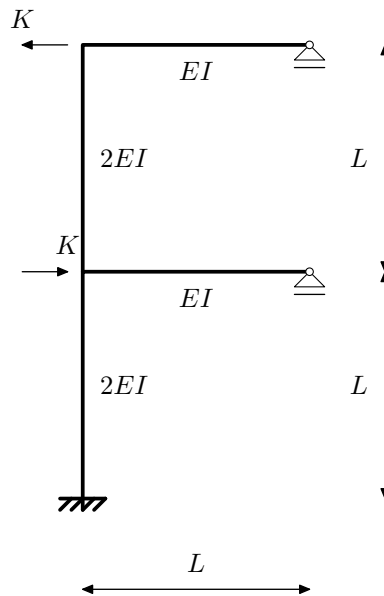
Zadatak 1. (30) Inženjerskom metodom pomaka odredite momentni dijagram.



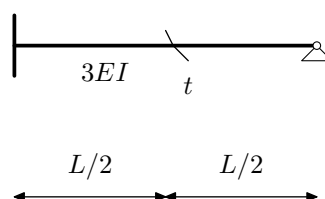
Zadatak 2. (25) Crossovim postupkom odredite horizontalni pomak kliznog ležaja.



Zadatak 3. (20) Postupkom Csonka-Werner odredite M dijagram.



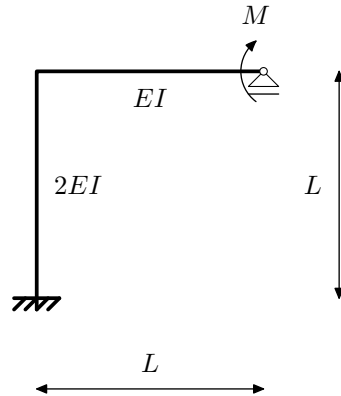
Zadatak 4. (15) Odredite utjecajnu funkciju η_{M_t}



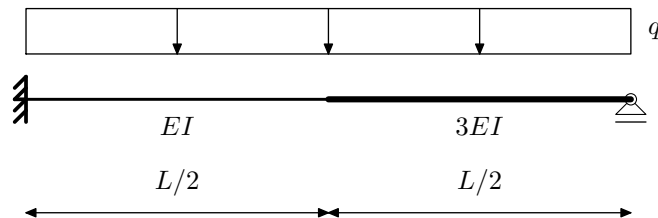
Zadatak 5. (10) Objasnite razliku metode pomaka i inženjerske metode pomaka.

NMK –1.KOLOKVIJ, 30.11.2012. - C

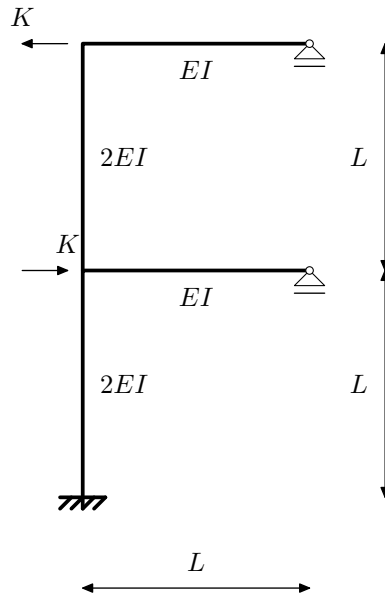
Zadatak 1. (30) Inženjerskom metodom pomaka odredite horizontalni pomak kliznog ležaja.



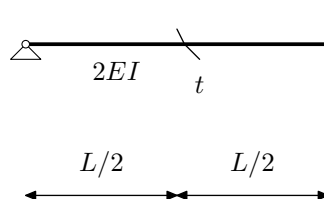
Zadatak 2. (25) Crossovim postupkom odredite momentni dijagram.



Zadatak 3. (20) Postupkom Csonka-Werner odredite M dijagram.



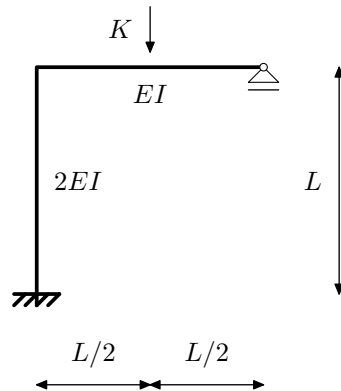
Zadatak 4. (15) Odredite utjecajnu funkciju η_{M_t}



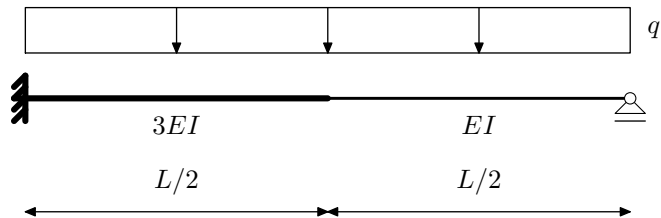
Zadatak 5. (10) Navedite osnovne pretpostavke metode Csonka-Werner

NMK –1.KOLOKVIJ, 30.11.2012. - D

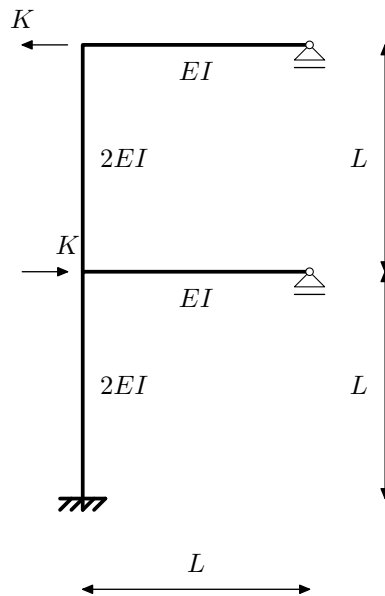
Zadatak 1. (30) Inženjerskom metodom pomaka odredite horizontalni pomak kliznog ležaja.



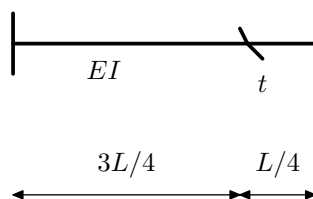
Zadatak 2. (25) Crossovim postupkom odredite momentni dijagram.



Zadatak 3. (20) Postupkom Csonka-Werner odredite M dijagram.



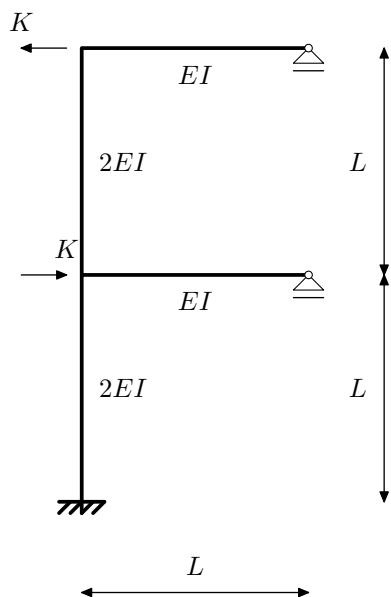
Zadatak 4. (15) Odredite utjecajnu funkciju η_{M_t}



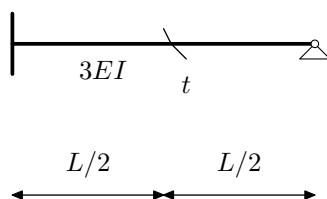
Zadatak 5. (10) Objasnite razliku metode pomaka i inženjerske metode pomaka.

NMK –1.KOLOKVIJ, 30.11.2012. - E

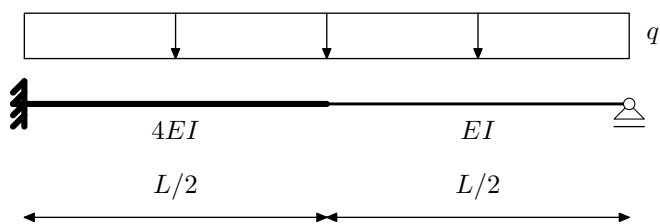
Zadatak 1. (20) Postupkom Csonka-Werner odredite M dijagram.



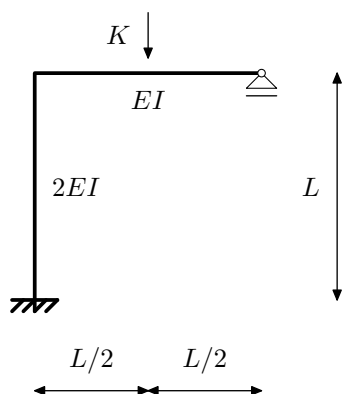
Zadatak 2. (15) Odredite utjecajnu funkciju η_{M_t}



Zadatak 3. (30) Inženjerskom metodom pomaka odredite momentni dijagram.



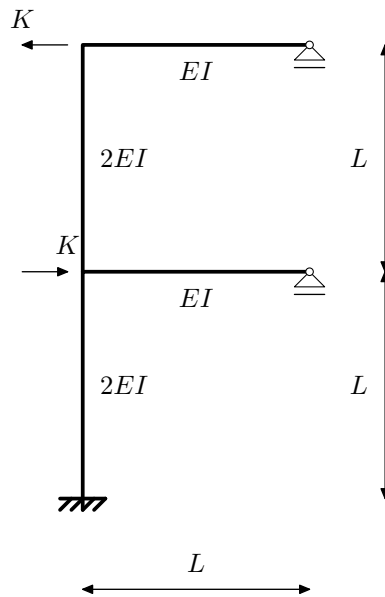
Zadatak 4. (25) Crossovim postupkom odredite horizontalni pomak kliznog ležaja.



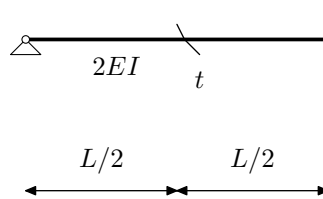
Zadatak 5. (10) Objasnite razliku metode pomaka i inženjerske metode pomaka.

NMK –1.KOLOKVIJ, 30.11.2012. - F

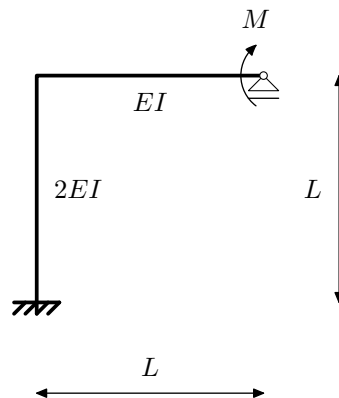
Zadatak 1. (20) Postupkom Csonka-Werner odredite M dijagram.



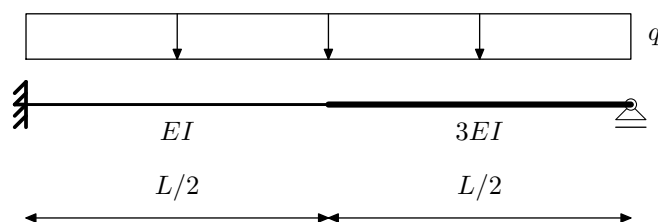
Zadatak 2. (15) Odredite utjecajnu funkciju η_{M_t}



Zadatak 3. (30) Inženjerskom metodom pomaka odredite horizontalni pomak kliznog ležaja.



Zadatak 4. (25) Crossovim postupkom odredite momentni dijagram.



Zadatak 5. (10) Navedite osnovne pretpostavke metode Csonka-Werner